

असतो मा सद्गमय, तमसो मा ज्योतिर्गमय।।



NEW INDIA SENIOR SECONDARY SCHOOL
SECTOR-15, PANCHKULA

Affiliated to CBSE

www.newindiapanchkula.in

WINTER BREAK

ASSIGNMENT

DECEMBER 31, 2024 TO JANUARY 15, 2025

THE SCHOOL REOPENS ON JANUARY 16, 2025.



CLASS-II

Dear Parents

Vacations are welcome break....Break from schedules, rules and regulations of the school. Freedom brings more responsibility, so keeping this in mind, we have planned most of the activities to keep our children engaged and also help them in channelizing their energy. Kindly help and guide your child in completing his/her work and also exploring his/her creative self. Submit the assignment to the Class Teacher on January 16, 2025.

HOW INDEPENDENT CAN I BECOME?

- Make your child more independent by teaching him or her various activities like.
- Buttoning and unbuttoning the shirt.
- Laying the table.
- Folding mats and clothes.
- Arranging their toy shelf.
- Learning how to zip their school bag and their uniform.
- Sorting and pairing household items.

HAPPY HOLIDAYS !

☁ ALL ABOUT ME ☁



My name is _____



I am _____ year old.

My favorite



subject : _____




color : _____



food : _____



sport: _____



I want to be a _____



My best friend is _____

My hobby is _____

PRESENT SIMPLE vs PRESENT CONTINUOUS

- Complete the sentences in present simple. Then match.

1. He _____ (work) at the cinema.

2. We _____ (dance) at school.

3. They _____ (listen) to music.

4. She _____ (learn) about art.



- Drag the correct answer in present continuous.

1. We _____ (play) baseball.

are is play playing

2. She _____ (swim) at the sea.

are is swim swimming

3. I _____ (color) the picture.

are am coloring color

Punctuation

End the sentences with correct punctuation mark.

.	!	?
---	---	---

1. Let us meet tomorrow

2. This is my new pen

3. What is your name

4. Wow

5. Can i sit here

6. What are you doing here

7. the flower vase is beautiful

8. rose is my favorite flower

9. It is so modern



Reading Comprehension / Unseen Passage

Read the short passage and answer the questions.

Our Friendly Neighbours

My name is Maria and I live in Mumbai with my grandparents, parents, and my naughty younger brother. Our neighbours are the Naiks, who live in the penthouse. They have a pet, the friendly Beagle, named Oliver. Mr Naik always takes Oliver for a walk in the morning and comes back with little goodies for my brother and me. Mrs Naik is a great cook and whenever they cook anything the aroma floods our house and all of us keep dreaming what it is. Their children are married and live outside Mumbai.

One day, my mom was unwell and had to be hospitalised for a few days, my dad was wondering how to manage food for us. The Naiks came home and told my parents not to worry and they will manage our kitchen. Everyday, they used to come to our house in the morning by 6. 30 am and make our breakfast & lunch, which was always something different and tasty. They used to cook dinner at their home and send it to us. My grandparents also love their cooking.

My dad told me that time, it is a great virtue to help one another at times of need which I will always remember thanks to the Naiks.

1. How many people are there in Marla's house? _____
2. Where were the Naiks living? _____
3. Who was hospitalised and what was the issue because of that?

4. What did Maria learn from this incident?

5. Write down 3 good qualities you think one should have.

- Write a paragraph on each of the following topics and learn them for ASL.

1. Why It's important to share?

2. A Place I want to visit

- DO PAGE NO. 1-10 IN CURSIVE WRITING BOOK-3

हिंदी

(क) अपठित गद्यांश को पढ़कर प्रश्नों के उत्तर दीजिए -

राज अपनी बहन मीरा के साथ सेब लेने बगीचे में गया। वे दोनों अपने घर के पीछे वाले सेब के बगीचे में सेब लेने गए। सेब का जैम बनाने के लिए उन्हें बारह सेब लेने होंगे। माँ ने उनसे कहा था। कि बगीचे में से केवल पक्के और अच्छे से ही उठाना। बाग में से राज ने नौ और मीरा ने तीन सेब चुनें। आज उनका एक साथ अच्छा दिन था। अब वे अपने जैम का आनंद लेने के लिए और इंतज़ार नहीं कर सकते थे।

प्रश्न:- (1) राज कहा गया था ?

- (i) बाज़ार में (ii) बगीचे में (iii) स्कूल (iv) ठेले पर

प्रश्न:- (2) राज के साथ कौन गया था?

- (i) मीरा (ii) सीमा (iii) रीमा (iv) नीरा

प्रश्न:- (3) मीरा कौन थी?

- (i) दोस्त (ii) बहन (iii) बुआ (iv) माँ

प्रश्न:- (4) बगीचा कहा था?

- (i) घर के सामने (ii) घर के पीछे (iii) घर से दूर (iv) आँगन में

प्रश्न:- 5 राज ने कितने सेब चुनें?

- (i) पांच (ii) सात (iii) नौ (iv) आठ

(ख) एक से अनेक लिखिए:

- (i) साड़ी -
- (ii) किताब -
- (iii) सब्जी -
- (iv) चूड़ी -
- (v) रोटी -

(ग) लिंग बदलो-

- (i) चूहा -
- (ii) बच्चा -
- (iii) चाचा -
- (iv) नानी -
- (v) सेठ -

(घ) सामान अर्थ वाले शब्द लिखिए -






- (i) सूर्य -
- (ii) धरती -
- (iii) जल -
- (iv) वायु -
- (v) तालाब -

(ङ) दिए गए विषयों पर अनुच्छेद लिखिए और वाचन कौशल **ASL** के लिए याद कीजिये:

- (1) मेरा परिवार
- (2) पेड़ों का महत्व

MATHEMATICS

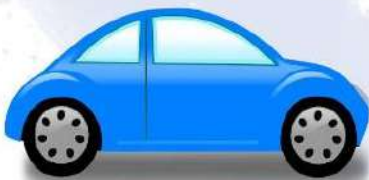
Match the times. The first one has been done for you.

	Quarter past 5	5:15
	3 o'clock	4:45
	Quarter to 5	3:00
	8 o'clock	10:30
	Half past 10	8:00



Money

Anna is shopping in market. She has denominations of Rs 20, Rs 10 and coins of Rs 5 and Rs 2. How many of each of these notes or coins she must give to the shopkeeper to buy each of these?



$$\begin{array}{cccc} \text{Rs} & & \text{Rs} & & \text{Rs} & & \text{Rs} \\ \square & + & \square & + & \square & + & \square \end{array}$$

Rs 125



$$\begin{array}{ccc} \text{Rs} & & \text{Rs} & & \text{Rs} \\ \square & + & \square & + & \square \end{array}$$

Rs 30

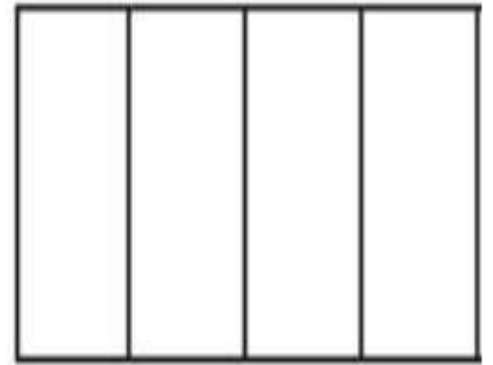
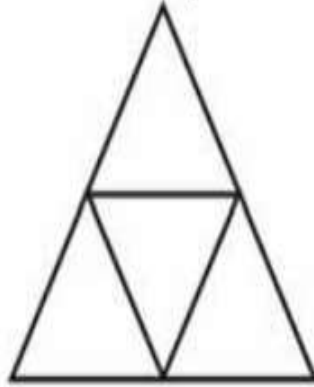
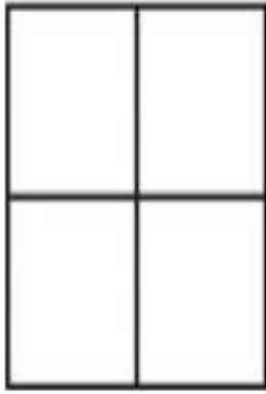


$$\begin{array}{ccc} \text{Rs} & & \text{Rs} & & \text{Rs} \\ \square & + & \square & + & \square \end{array}$$

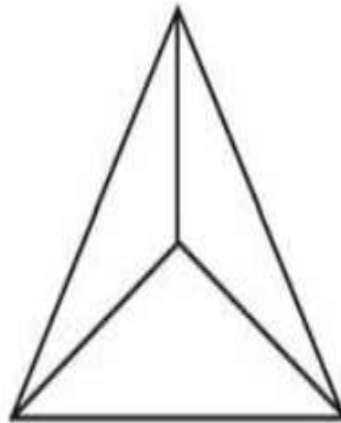

Rs 27




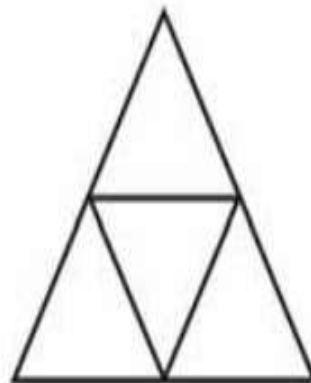

(1) Colour one fourth ($1/4$) of each shape.



(2) Colour one third ($1/3$) of each shape.




(3) Colour three fourth ($3/4$) of each shape.



Label the parts of the plant .

flower *seed* *leaf* *stem* *root*



Circle where the plant will produce new seeds.

Name the landforms and waterbodies in the following blanks:



a. _____



b. _____



c. _____



d. _____

VISUAL ART

Draw a Snowman and colour it.

